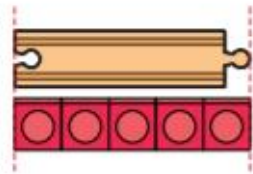


Maths. Week 2, Task 3.

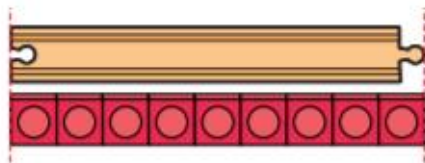
Complete the worksheet.

Adding lengths

- 1 A short piece of train track is 5 cubes long.



A long piece of train track is 9 cubes long.




- a) A short and long piece are put together.







What is the total length of the two pieces?

- b) What is the total length of two short pieces?



- 2 Mo uses paper clips to measure the length of some objects.

Object	Number of paper clips
scissors 	7
book 	12
pencil 	8
rubber 	3

- a) What is the total length of the scissors and the book?
- b) What is the total length of the pencil and the rubber?
- c) Which two objects measure 10 paper clips in total?
- d) Which two objects measure 15 paper clips in total?
Is there more than one answer?

